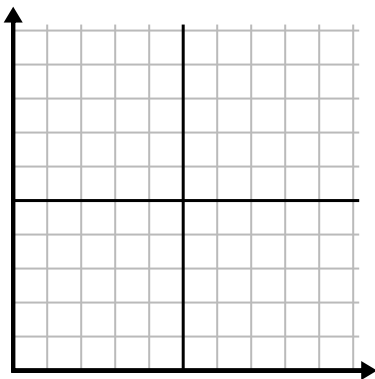




Fill in the grid using the chart.

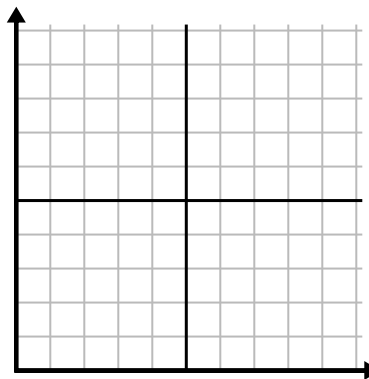
1)

Year	1	2	3	4	5	6
Boxes of Pens Used	10	1	6	2	7	8



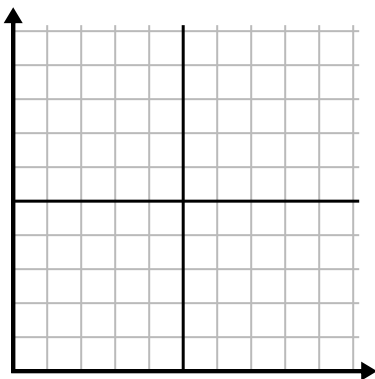
2)

Day	1	2	3	4	5
Texts Sent	25	35	40	15	5



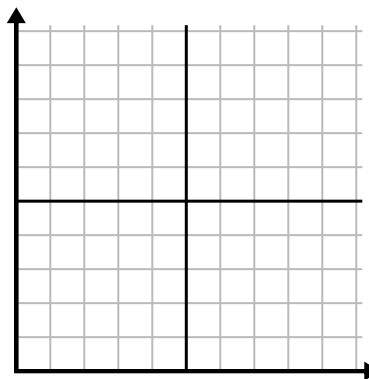
3)

Year	1	2	3	4	5
Ink Cartridges Used	10	4	12	2	14



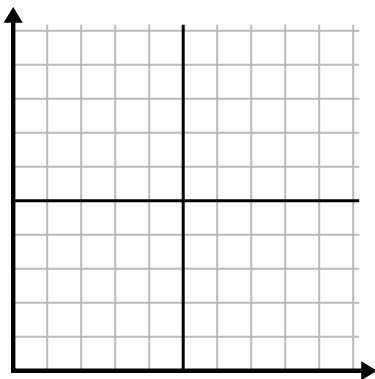
4)

Day	1	2	3	4	5
Youtube Videos Watched	120	60	300	150	30



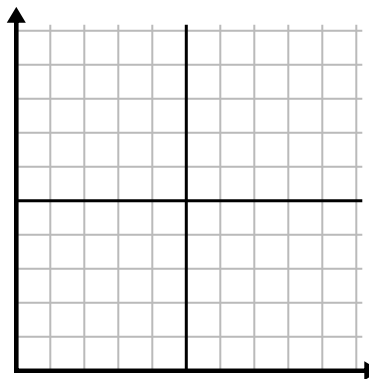
5)

Week	1	2	3	4	5	6	7
Water Used (gallons)	100	50	90	10	60	80	40



6)

Day	1	2	3	4	5	6	7
Money Spent	1	7	3	4	5	6	8

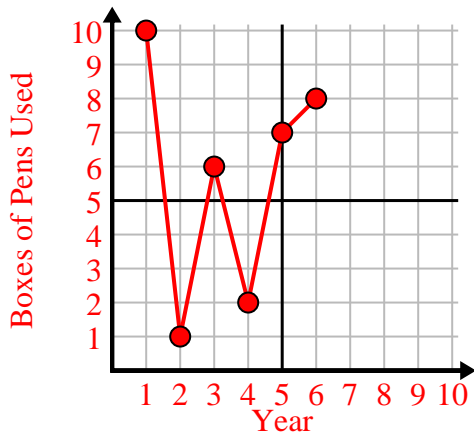




Fill in the grid using the chart.

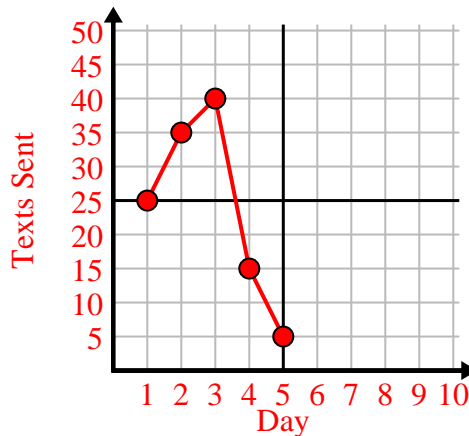
1)

Year	1	2	3	4	5	6
Boxes of Pens Used	10	1	6	2	7	8



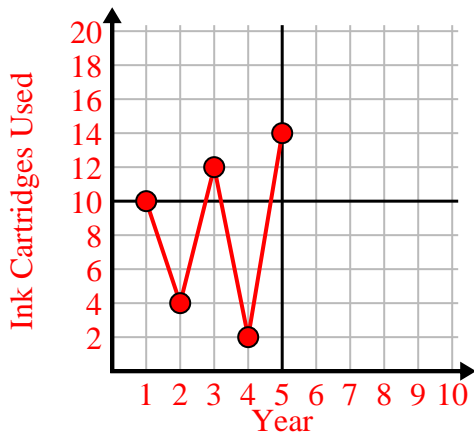
2)

Day	1	2	3	4	5
Texts Sent	25	35	40	15	5



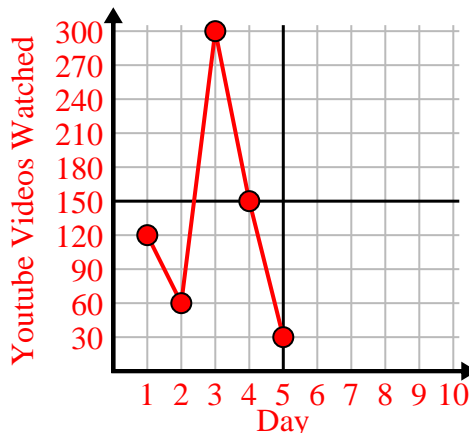
3)

Year	1	2	3	4	5
Ink Cartridges Used	10	4	12	2	14



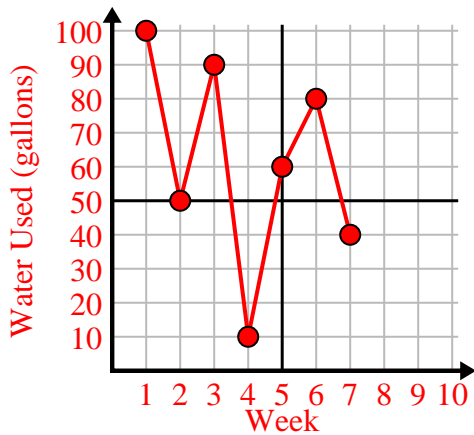
4)

Day	1	2	3	4	5
Youtube Videos Watched	120	60	300	150	30



5)

Week	1	2	3	4	5	6	7
Water Used (gallons)	100	50	90	10	60	80	40



6)

Day	1	2	3	4	5	6	7
Money Spent	1	7	3	4	5	6	8

